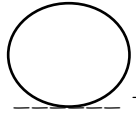


What is the next friendly 10 number? _____

How many more do you need? _____



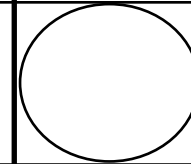
_____ + _____ = _____

Show how to add to make this number.

ten less

one less

one more



ten more

Write the number in word form

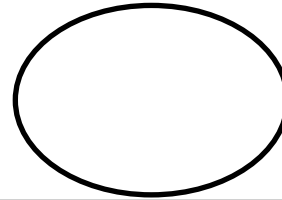
Show how to subtract to make this number.

Write the number in expanded form.

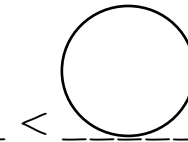
NUMBER OF THE DAY

Compare this number

odd



even

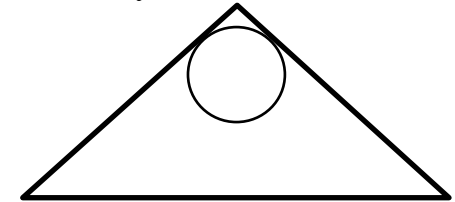


< _____ < _____

Show what the number looks like.
(base ten, ten frames, tally marks)

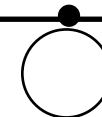
Show how to make this number with money.

Write the number at the top of a fact triangle, then fill in the rest.



Show the place value of each digit
Hundreds Tens Ones

Show how to get to this number on a number line



_____ + _____ = _____

_____ + _____ = _____

_____ - _____ = _____

_____ - _____ = _____