

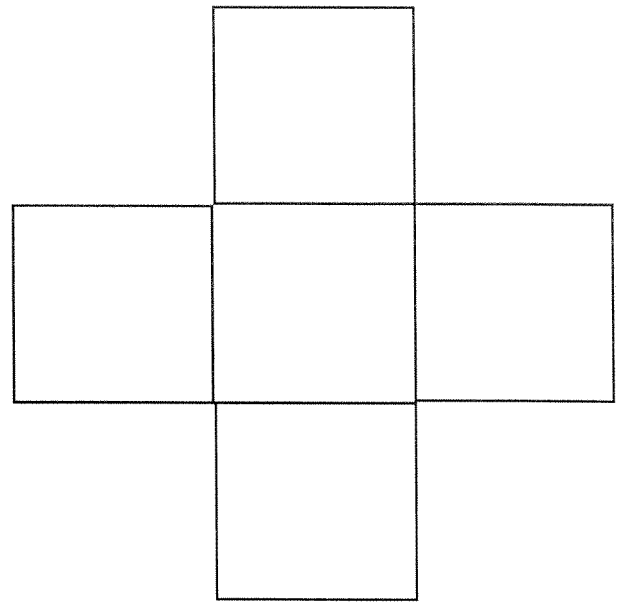
Comparing Numbers



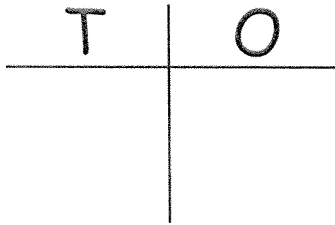
_____ ○ _____

_____ ○ _____

_____ ○ _____



Place Value



_____ tens + _____ ones = _____

_____ + _____ = _____

Tally Marks


_____ = _____

_____ = _____

_____ = _____

_____ = _____


_____ + _____ = _____



Can you exchange ones to make a ten?

_____ + _____ = _____

Show this number in different ways



Counting Patterns

By _____

_____ , _____ , _____ , _____ , _____ , _____

By _____

_____ , _____ , _____ , _____ , _____ , _____

By _____

_____ , _____ , _____ , _____ , _____ , _____

Equality Equations

_____ = _____ T or F

_____ = _____ T or F

_____ = _____ T or F

_____ = _____ T or F

Fact Family Equations



=



=



=



=

Decompose this Number

+ / -

Double It

Double +1
